


Solve 1-Step Inequalities (-)

Name: _____ / _____

 Solve each inequality and graph your solution on the number line.

< is less than

> is greater than

 \leq is less than or equal to \geq is greater than or equal to

1) $-10.4 < -2.9 + c$

2) $25.1 \geq 12.6 + n$



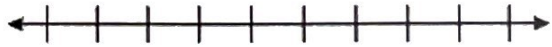
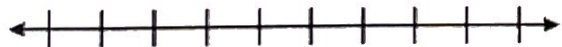
3) $-y < 8\frac{1}{2}$

4) $-3x \geq 8$



5) $\frac{m}{-4} < 11$

6) $-\frac{h}{2} \geq -9$



7) $36 < -4x$

8) $-10 \geq \frac{a}{-8}$

